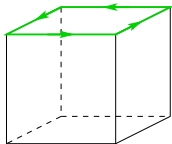


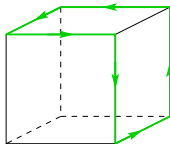


If the magnetic moment of the current loop (1) is $\mu_1 = 1\text{Am}^2$, what are the magnetic moments μ_2, μ_3, μ_4 of the current loops (2), (3), (4), respectively?

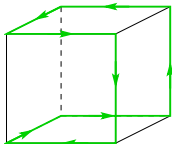
(1)



(2)



(3)



(4)

